

11. Write 10 separate sixteenth notes in space 1.













12. Write 4 groups of 4 sixteenth notes on line 2.



13. Write 4 groups of 4 sixteenth notes in space 4.



RESTS are signs which show periods of silence. There is a rest that has the same value as each kind of note.

whole note			whole rest
half note			half rest
quarter note			quarter rest
eighth note			eighth rest
sixteenth note			sixteenth rest

Be sure that you know where the whole rest and the half rest go. They are both in space 3 but the whole rest HANGS DOWN from line 4 and the half rest SITS ON line 3.



whole rest

half rest

